

Lets play PIG

- you will need a piece of paper and a pencil

May 11-10:56 AM

Page 231

7.3

Non-Parallel Lines and Transversals

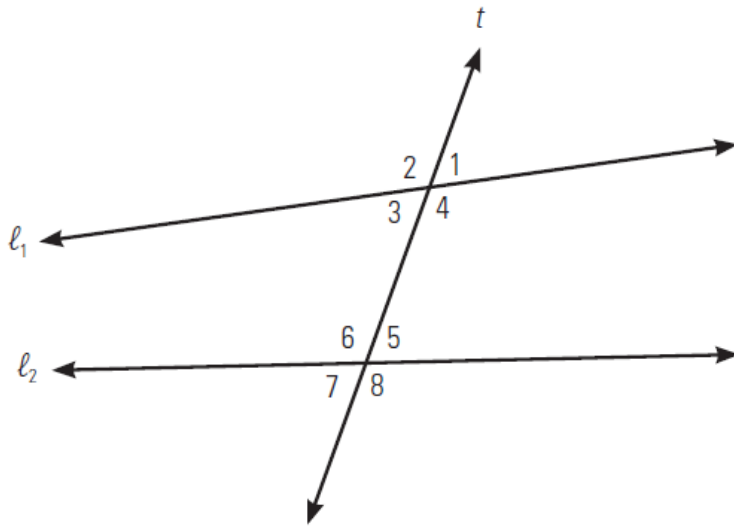
What do we know about parallel lines?



Apr 4-9:56 AM



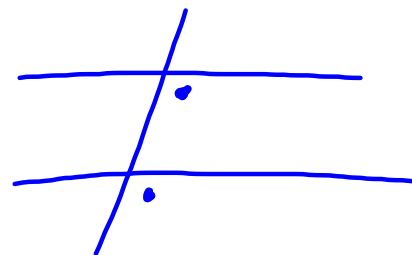
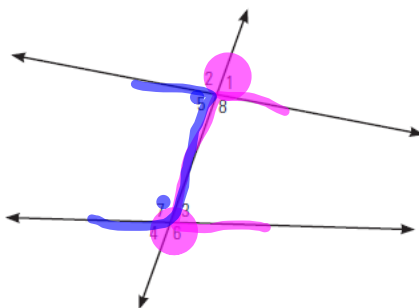
Consider the diagram below: t is a transversal that intersects l_1 and l_2 .



Nov 21-3:15 PM

BUILD YOUR SKILLS

1. In the diagram below, identify the relationship between each pair of angles.



- a) $\angle 7$ and $\angle 8$ Alternate interior
- b) $\angle 2$ and $\angle 7$ Corresponding angles
- c) $\angle 1$ and $\angle 6$ Exterior angles on the same side
- d) $\angle 5$ and $\angle 7$ Interior angles on the same side

Apr 4-10:27 AM

Homework

pg. 233- 234 Q. 2 &3

Pg. 235 Q. 4 & 5

Pass out 7.3 - 7.4 Assignment

Dec 9-3:32 PM