

Number Triangles

Write numbers in the circles so that each side of the triangle equals 20.

Use each number only once.

1	6
2	7
3	8
4	9
5	

Oct 1-1:06 PM

GMF 10
Lesson 2.3 (1)

Additional Earnings
2.3

NEW SKILLS: WORKING WITH INCOME SUPPLEMENTS

A bonus is an extra amount earned for a job well done or for exceeding expectations, and is paid in addition to regular pay and/or overtime pay. It may be a lump sum or a percentage of earnings. Danger pay, isolation pay, a shift premium, and tips are also paid in addition to regular pay.

Feb 3-8:49 PM

Bonus - extra pay earned when certain conditions of employment have been met or exceeded.



Bonuses can be trips, items or money

Feb 13-4:41 PM

Example 1

Page 97

Marika works during the summer as a supervisor of a children's program at the local community centre. She has a good reputation with the children and her employer wants her to come back next year. Marika earned \$3600.00 during the summer and her employer offers her a 15% signing bonus if she will sign up for next year. If Marika signs up, how much will she get as a signing bonus?

\$540

BUILD YOUR SKILLS


1. Chester wants to clear out his used car sales lot in Surrey, BC. To do so, he offers his employees an incentive for each car they sell. They will receive bonuses in the following amounts:

- \$50.00 for each car they sell for more than \$20 000.00
- \$40.00 for each car they sell between \$15 000.00 and \$19 999.00
- \$30.00 for each car they sell between \$10 000.00 and \$14 999.00
- \$25.00 for each car they sell below \$10 000.00

Gerry sells cars worth \$14 895.00, \$19 998.00, \$15 675.00, \$7250.00, and \$15 229.00. What is his bonus pay?

$$30 + 40 + 40 + 25 + 20 = \$175.00$$

Feb 3-8:50 PM



Shift premium - extra payment for non-standard working hours.

What is a graveyard shift?

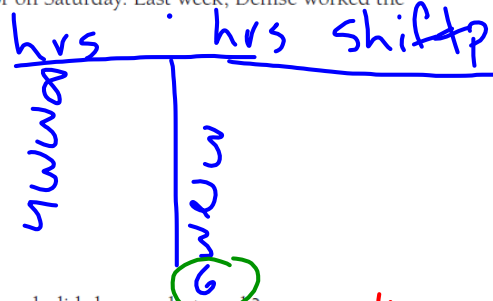
What is a swing shift?

Feb 13-4:41 PM

BUILD YOUR SKILLS

4. Regular hours at the computer repair shop where Denise works are 9:00 am to 5:00 pm, Monday to Friday. Her boss has offered a shift premium of \$1.75/hour to anyone who will work after 5:00 pm or on Saturday. Last week, Denise worked the following hours:

- Monday: 9:00 am–5:00 pm
- Tuesday: 2:00 pm–8:00 pm
- Wednesday: 2:00 pm–7:00 pm
- Thursday: 12:00 pm–8:00 pm
- Saturday: 9:00 am–3:00 pm



If her regular pay was \$15.25/h, how much did she earn last week?

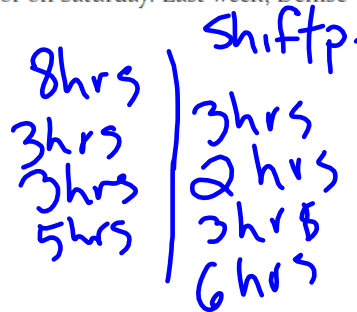
$$19 \text{ hrs} \times 15.25/\text{hr} + 14 \text{ hrs} \times 17/\text{hr} = \$527.75$$

Feb 3-9:08 PM

BUILD YOUR SKILLS

4. Regular hours at the computer repair shop where Denise works are 9:00 am to 5:00 pm, Monday to Friday. Her boss has offered a shift premium of \$1.75/hour to anyone who will work after 5:00 pm or on Saturday. Last week, Denise worked the following hours:

- Monday: 9:00 am–5:00 pm ✓
- Tuesday: 2:00 pm–8:00 pm
- Wednesday: 2:00 pm–7:00 pm
- Thursday: 12:00 pm–8:00 pm
- Saturday: 9:00 am–3:00 pm



$$\begin{array}{r} 15.25 \\ 1.75 \\ \hline 17.00 \end{array}$$

If her regular pay was \$15.25/h, how much did she earn last week?

$$19 \text{ hrs} \cdot 15.25/\text{hr} + 14 \text{ hrs} \cdot 17/\text{hr} = 289.75 + 238 = \$527.75$$

Feb 3-9:08 PM

BUILD YOUR SKILLS

7. Kirsten earns a base salary of \$8.20/h plus tips. On a typical day, she bills her customers \$950.00, and her tips average 15%. What is Kirsten's average daily income with tips for an 8-hour day?

$$\begin{array}{l} \$8.20/\text{hr} \times 8 = \$65.60 \\ 950.00 \times 0.15 = 142.50 \\ \hline \$208.10 \end{array}$$

15% "of" 950
'X'

Mar 11-10:02 PM

Homework

Pg. 98 Q 2 & 3

Pg. 101-102 Q. 5 & 6

Pg. 103 Q. 8 & 9

Jan 29-7:17 PM